


Taking Away

There were 3 cupcakes on the plate. 1 was eaten.




How many were left?

There were 4 apples on a tree. 2 were picked.




How many were left?

Can you work out the answer?



$$- 3 =$$

Can you work out the answer?




$$- 2 =$$

1 2 3 4 5
6 7 8 9 10



Counting to 20

Can you count the eggs in the nest?



Can you count the ducklings in the pond?



How many flowers are on the bush?



What numbers come next?

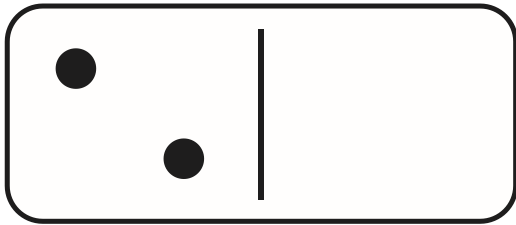
12, 13, 14, ,

1 2 3 4 5
6 7 8 9 10




Doubling


What is double 2? Draw the spots on the other side of the domino.




Double the number of sausages in the pan.



What is double 3?



1 counter goes in the doubling machine.
How many come out?



1 2 3 4 5
6 7 8 9 10

