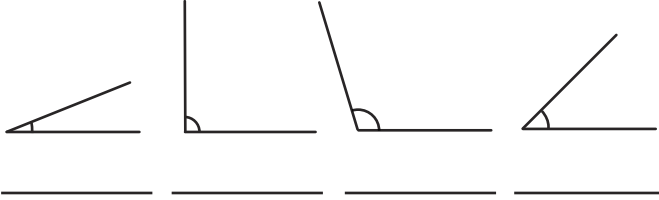


- 1) Complete these sentences:
An angle less than a right angle is called an _____ angle.



An angle greater than a right angle, but less than 180° , is called an _____ angle.

- 2) Label each of these angles as obtuse, acute or a right angle. In your book, draw and label your own angle.



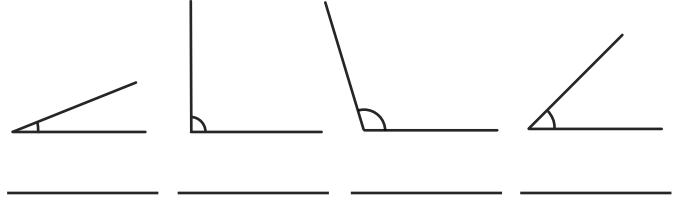
twinkl.com

- 1) Complete these sentences:
An angle less than a right angle is called an _____ angle.



An angle greater than a right angle, but less than 180° , is called an _____ angle.

- 2) Label each of these angles as obtuse, acute or a right angle. In your book, draw and label your own angle.



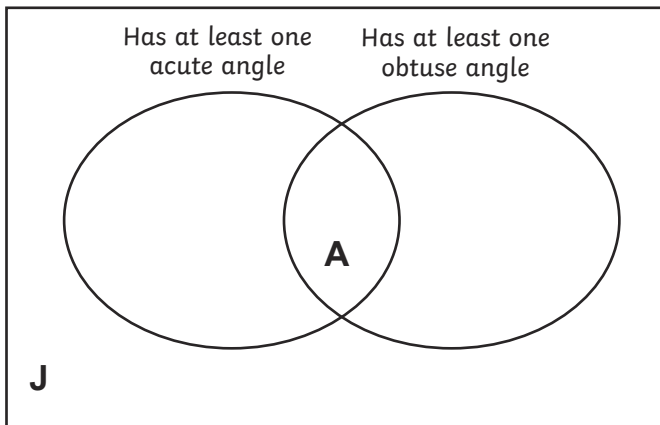
twinkl.com

- 1) Are the angles between the hour and minute hands on these clocks obtuse, acute or right angles?



- 2) Place these letters correctly in the Venn diagram:

K E M T C Y



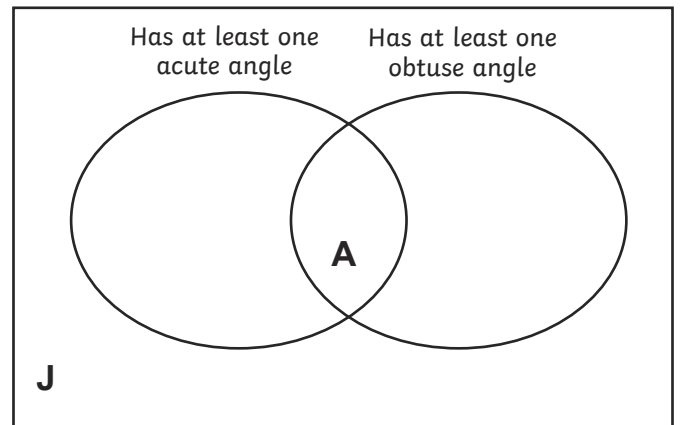
twinkl.com

- 1) Are the angles between the hour and minute hands on these clocks obtuse, acute or right angles?



- 2) Place these letters correctly in the Venn diagram:

K E M T C Y



twinkl.com

- 1) In your book, draw a shape with two obtuse and two acute angles.



- 2) Nikolas and Carla describe this shape differently:




Nikolas

This shape has four right angles. Two of them are curved.



Carla

This shape has two right angles.



Who do you agree with? Explain why.

twinkl.com

- 1) In your book, draw a shape with two obtuse and two acute angles.



- 2) Nikolas and Carla describe this shape differently:




Nikolas

This shape has four right angles. Two of them are curved.



Carla

This shape has two right angles.



Who do you agree with? Explain why.

twinkl.com