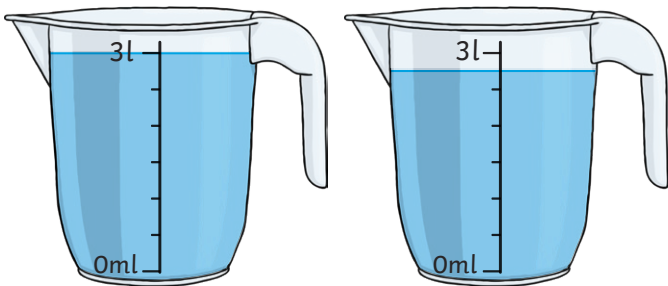
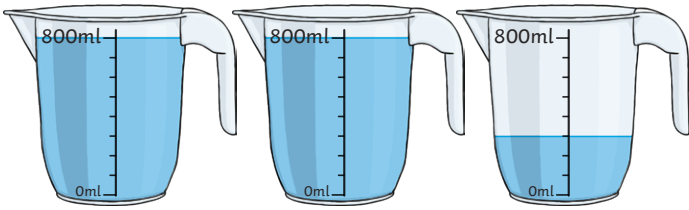
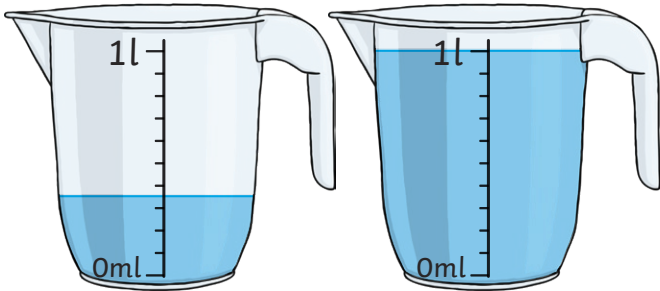


1) What is each interval worth on the container?

2) What is the capacity of one container?

3) What is the volume of the liquid in the part-filled container?

4) What is the total volume of liquid?



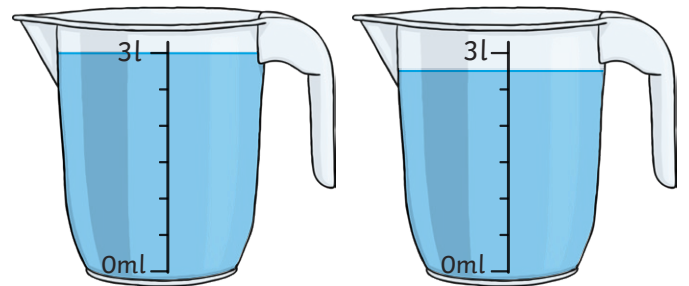
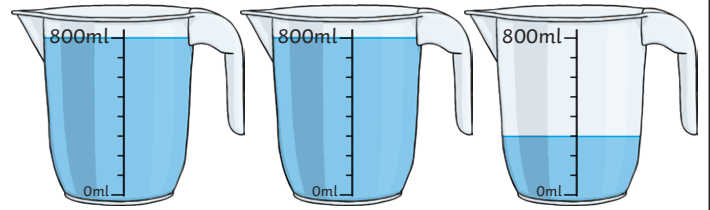
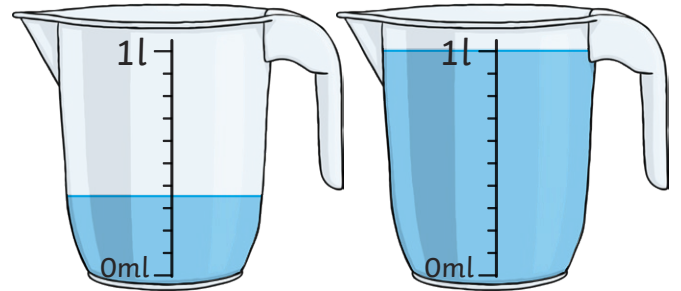
twinkl.com

1) What is each interval worth on the container?

2) What is the capacity of one container?

3) What is the volume of the liquid in the part-filled container?

4) What is the total volume of liquid?

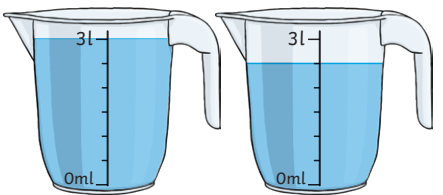


twinkl.com

Eva and Joe have been using jugs of water to fill a bucket.



Joe says, "I used this many jugs."



Eva says, "I used this many jugs."



1) Who put more water into the bucket? Explain your answer.

2) Joe says that the volume of liquid in this bucket is 8 litres 600ml. Eva thinks it is less than that. Who is correct? Explain your answer.

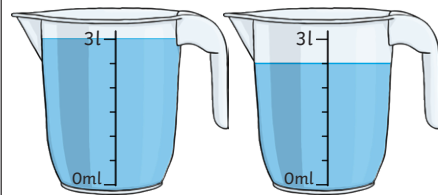


twinkl.com

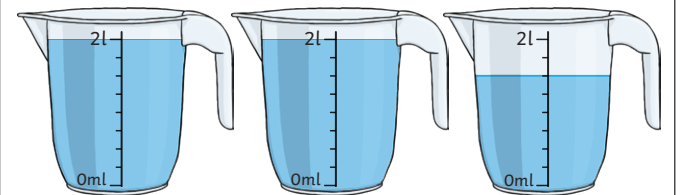
Eva and Joe have been using jugs of water to fill a bucket.



Joe says, "I used this many jugs."



Eva says, "I used this many jugs."



1) Who put more water into the bucket? Explain your answer.

2) Joe says that the volume of liquid in this bucket is 8 litres 600ml. Eva thinks it is less than that. Who is correct? Explain your answer.

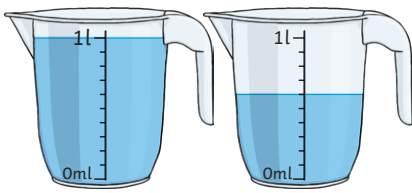


twinkl.com

Arif has been measuring the capacity of some containers but has lost the labels reminding him how much water filled each container.

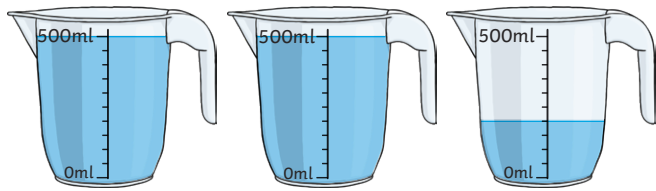


Fill in the missing information.

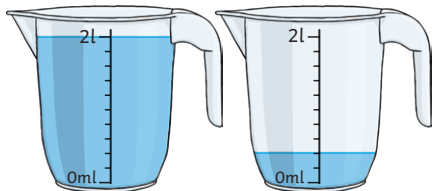


The volume of liquid is _____ l and _____ ml.

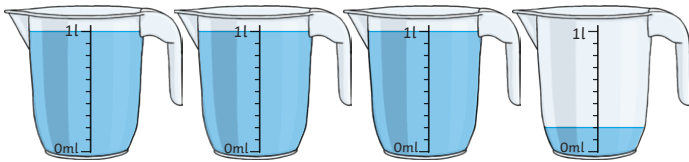
The volume of liquid is _____ l and _____ ml.



The volume of liquid is _____ l and _____ ml.



The volume of liquid is _____ l and _____ ml.



The volume of liquid is _____ l and _____ ml.

Use the clues to match the above capacities to the correct containers listed below.

The glass has a capacity of less than $\frac{3}{4}$ of a litre.

One cup has the same capacity as one glass.

The capacity of the pan is half the capacity of the bowl.


bottle	_____ l and _____ ml
bowl	_____ l and _____ ml
4 cups	_____ l and _____ ml
glass	_____ l and _____ ml
pan	_____ l and _____ ml

What clue could you give to describe the capacity of the bottle?

Arif has been measuring the capacity of some containers but has lost the labels reminding him how much water filled each container.

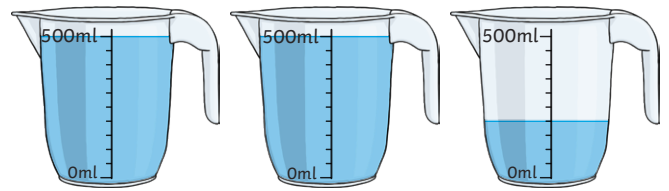


Fill in the missing information.

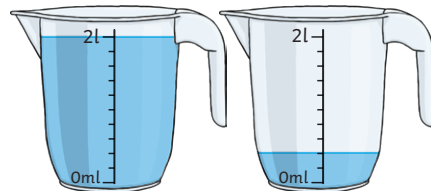


The volume of liquid is _____ l and _____ ml.

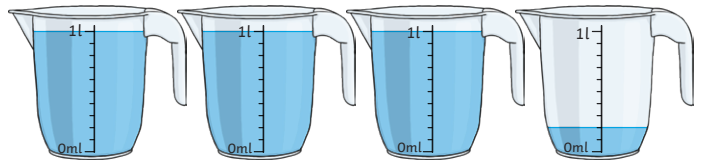
The volume of liquid is _____ l and _____ ml.



The volume of liquid is _____ l and _____ ml.



The volume of liquid is _____ l and _____ ml.



The volume of liquid is _____ l and _____ ml.

Use the clues to match the above capacities to the correct containers listed below.

The glass has a capacity of less than $\frac{3}{4}$ of a litre.

One cup has the same capacity as one glass.

The capacity of the pan is half the capacity of the bowl.

bottle	_____ l and _____ ml
bowl	_____ l and _____ ml
4 cups	_____ l and _____ ml
glass	_____ l and _____ ml
pan	_____ l and _____ ml

What clue could you give to describe the capacity of the bottle?