

Year 1 Maths Activity Mat

①

Section 1

Put in the missing numbers.

12		14		16		18		20
----	--	----	--	----	--	----	--	----

Section 2

Add 2 more lollies.



There would be lollies altogether.

Section 3


What's the missing number?

$$12 - \square = 10$$




Section 4

Which snake is the shortest?



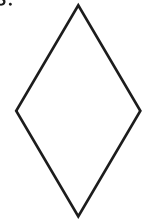
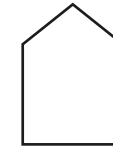
Section 5

Two dogs eat 5 biscuits each. How many biscuits did they eat altogether?



Section 6

Colour half of these shapes.



Section 7

Circle the even numbers.

12

7

16

13

8

Section 8

$$16 + \square = 20$$



$$11 + \square = 20$$



Year 1 Maths Activity Mat: 1

Answers

Section 1

Put in the missing numbers.

12	13	14	15	16	17	18	19	20
----	----	----	----	----	----	----	----	----

Section 2

Add 2 more lollies.



There would be lollies altogether.

Section 3


What's the missing number?

$$12 - \boxed{2} = 10$$




Section 4

Which snake is the shortest?



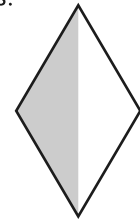
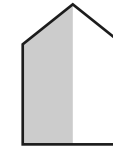
Section 5

Two dogs eat 5 biscuits each. How many biscuits did they eat altogether?



Section 6

Colour half of these shapes.



Section 7

Circle the even numbers.

12

7

16

13

8

Section 8

$$16 + \boxed{4} = 20$$



$$11 + \boxed{9} = 20$$

